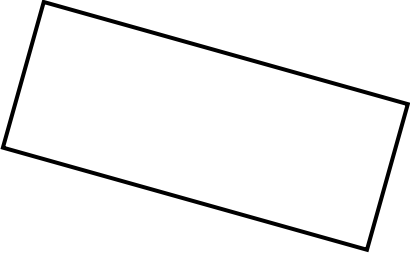



 $A = 6 \cdot s^2$	<h2 style="margin: 0;">Confronto di perimetri</h2>
--	--

Quale figura ha perimetro maggiore?

Dai prima una risposta ad “occhio”, poi prendi le misure dal disegno, fai i calcoli e verifica se la tua ipotesi era corretta.

<p>Figura A</p> 	<p>Figura B</p> 
<p>Stima ad occhio: <input type="checkbox"/> Figura A <input type="checkbox"/> Figura B <input type="checkbox"/> Uguale</p>	
<p>P =</p>	<p>P =</p>
<p>Misura del perimetro: cm</p>	<p>Misura del perimetro: cm</p>
<p>Conclusione: <input type="checkbox"/> Figura A <input type="checkbox"/> Figura B <input type="checkbox"/> Uguale</p>	


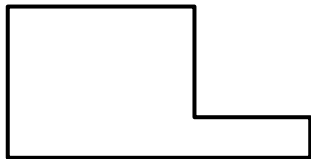
<p>Figura A</p> 	<p>Figura B</p> 
<p>Stima ad occhio: <input type="checkbox"/> Figura A <input type="checkbox"/> Figura B <input type="checkbox"/> Uguale</p>	
<p>P =</p>	<p>P =</p>
<p>Misura del perimetro: cm</p>	<p>Misura del perimetro: cm</p>
<p>Conclusione: <input type="checkbox"/> Figura A <input type="checkbox"/> Figura B <input type="checkbox"/> Uguale</p>	


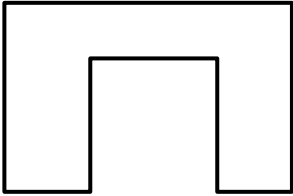
Figura A	Figura B
	
Stima ad occhio: <input type="checkbox"/> Figura A <input type="checkbox"/> Figura B <input type="checkbox"/> Uguale	
P =	P =
Misura del perimetro: cm	Misura del perimetro: cm
Conclusione: <input type="checkbox"/> Figura A <input type="checkbox"/> Figura B <input type="checkbox"/> Uguale	


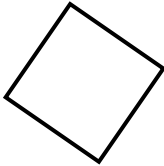

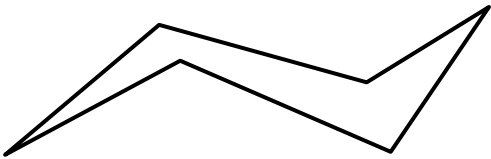
Figura A	Figura B
	
Stima ad occhio: <input type="checkbox"/> Figura A <input type="checkbox"/> Figura B <input type="checkbox"/> Uguale	
P =	P =
Misura del perimetro: cm	Misura del perimetro: cm
Conclusione: <input type="checkbox"/> Figura A <input type="checkbox"/> Figura B <input type="checkbox"/> Uguale	

Figura A	Figura B
	
Stima ad occhio: <input type="checkbox"/> Figura A <input type="checkbox"/> Figura B <input type="checkbox"/> Uguale	
P =	P =
Misura del perimetro: cm	Misura del perimetro: cm
Conclusione: <input type="checkbox"/> Figura A <input type="checkbox"/> Figura B <input type="checkbox"/> Uguale	