



$A = 6 \cdot s^2$

Esercizi sulle frazioni 1


1. In ogni figura colora una parte corrispondente alla frazione indicata.



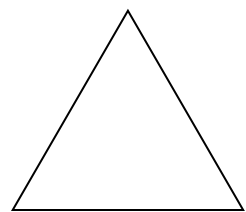
$$\frac{1}{4}$$



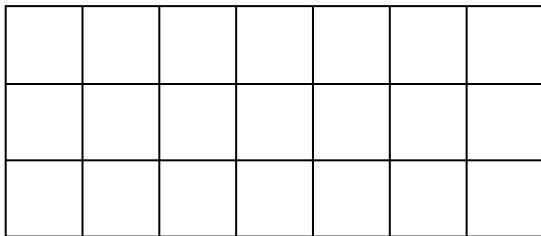
$$\frac{3}{8}$$



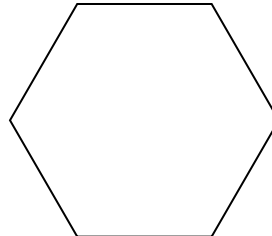
$$\frac{5}{16}$$



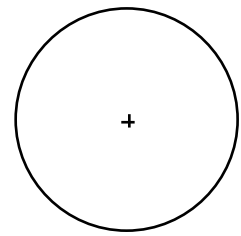
$$\frac{2}{3}$$



$$\frac{4}{7}$$






$$\frac{5}{6}$$

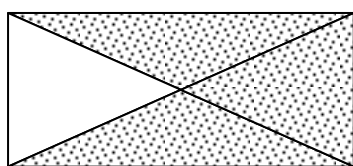


$$\frac{3}{8}$$

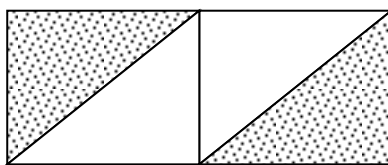
2. Colora un quarto dell'area di questo rettangolo in almeno tre modi diversi:



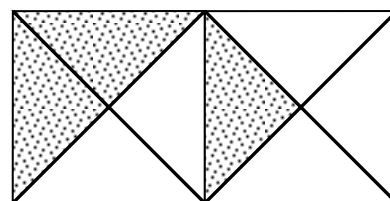
3. Completa la tabella riferendoti alle figure qui sotto:




a



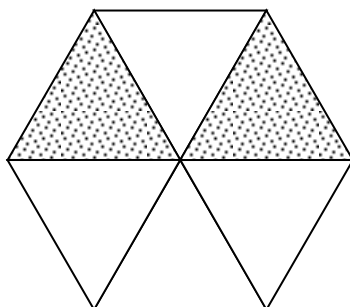
b



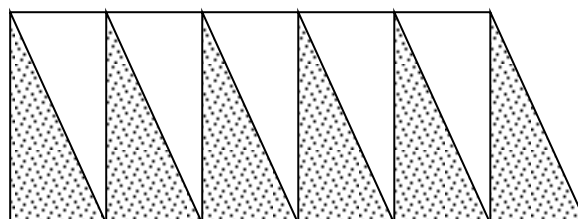
c



d



e



f

	a	b	c	d	e	f
Numero di parti della stessa area in cui è suddivisa la figura						
Numero di parti punteggiate						
Frazione corrispondente alle parti tratteggiate						
Frazione corrispondente alle parti non tratteggiate						