
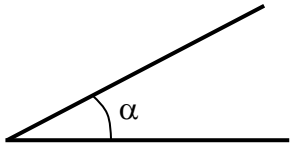

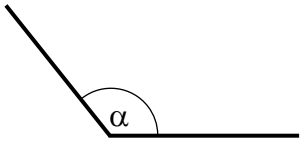
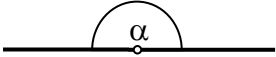
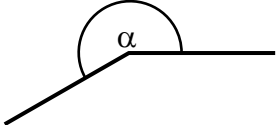
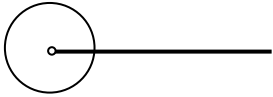


 <p><math>A = 6 \cdot s^2</math></p>	<h2 style="text-align: center;">La classificazione degli angoli secondo l'ampiezza</h2>
---	---

Disegno	Nome	Misura
	angolo nullo	$0^\circ$
	angolo acuto	$0^\circ < \alpha < 90^\circ$
	angolo retto	$90^\circ$
	angolo ottuso	$90^\circ < \alpha < 180^\circ$
	angolo piatto	$180^\circ$
	angolo concavo	$180^\circ < \alpha < 360^\circ$
	angolo giro	$360^\circ$